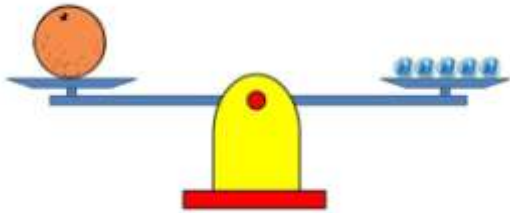


Directions: Fill in each blank with the correct number.

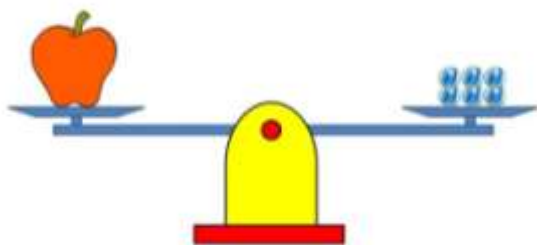
1.



The orange is as heavy as _____ marbles.

The mass of the orange is _____ marbles.

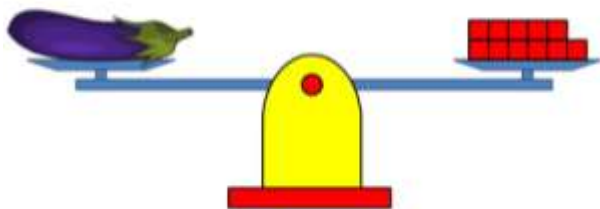
2.



The apple is as heavy as _____ marbles.

The mass of the apple is _____ marbles.

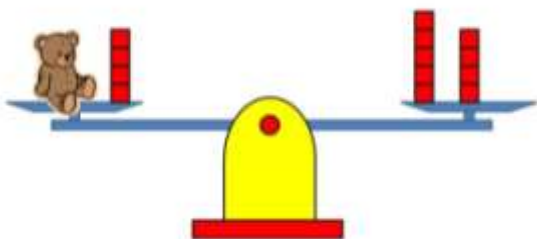
3.



The eggplant is as heavy as _____ cubes.

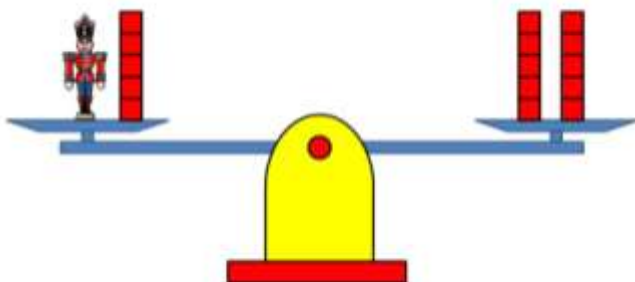
The mass of the eggplant is _____ cubes.

4.



The bear has the same mass as _____ cubes.

5.



The toy soldier has the same mass as _____ cubes.