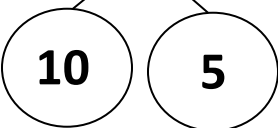


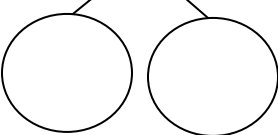
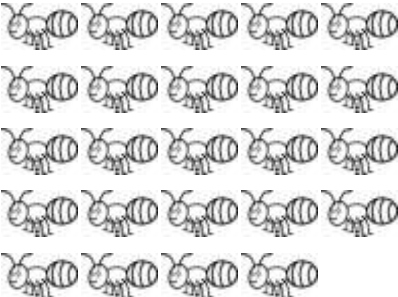
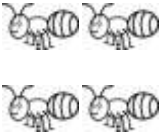
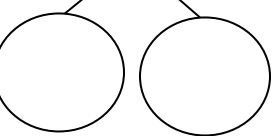


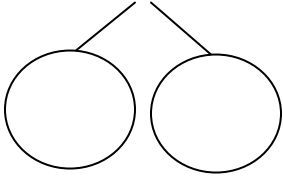




Directions: Circle in groups of 10. Then, complete the number bonds and add.

<p>(a) <math>15 + 4 = \underline{\hspace{2cm}}</math></p> 		
<p>(b) <math>24 + 4 = \underline{\hspace{2cm}}</math></p> 		
<p>(c) <math>22 + 5 = \underline{\hspace{2cm}}</math></p> 		
<p>(d) <math>31 + 8 = \underline{\hspace{2cm}}</math></p> 		
<p>(e) <math>32 + 6 = \underline{\hspace{2cm}}</math></p> 